



**INGILIZCE ZUMRESI**  
HIGH QUALITY ELT MATERIALS

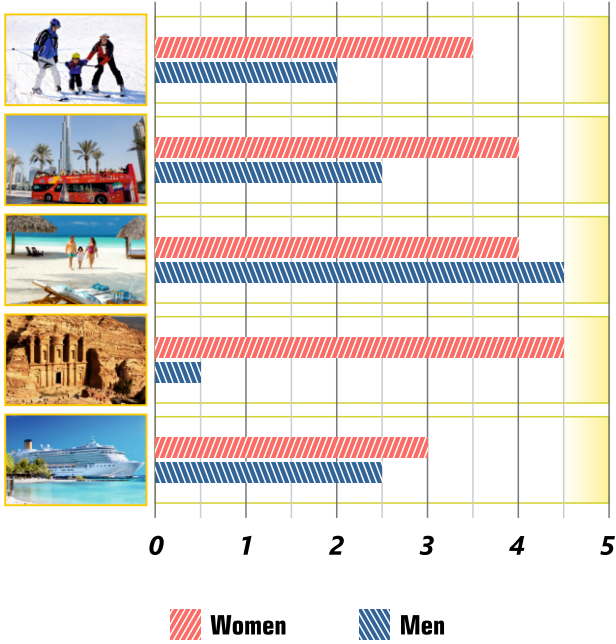
# 8<sup>th</sup> Grade DIAGRAM TEST - UNIT 7

Name:

Class:

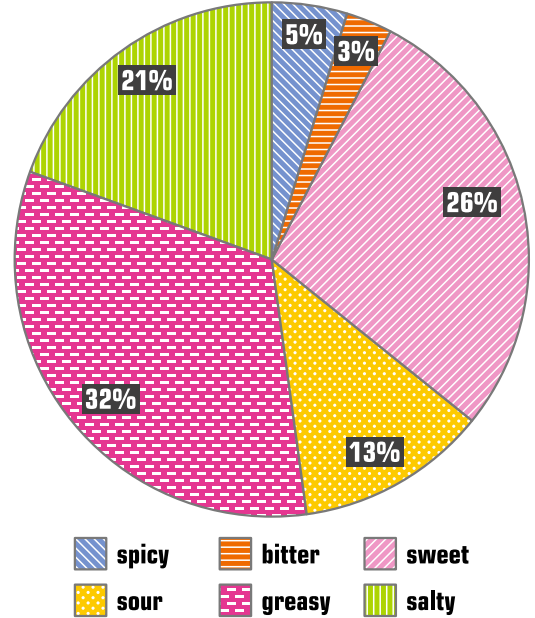
Answer the questions (1-3) according to the information below.

Women and men have different vacation preferences. Following chart shows what both men and women prefer while having holiday.



Answer the questions (4-6) according to the information below.

Following chart shows Sarah's eating habit.



1 | Not many men prefer ---- holidays.

- A) historical                      B) seaside  
C) cruise                            D) winter

2 | Which of the following is CORRECT?

- A) More men prefer city-sightseeing.  
B) More women like seaside holidays.  
C) Women isn't interested in cruise holidays.  
D) Winter holidays attract less men.

3 | When compared to women, ----.

- A) more men enjoy a vacation on a ship  
B) men never try skiing on their vacation  
C) less men interested in historical holidays  
D) less men enjoy spending time at the beach

4 | Sarah hardly ever has ---- food.

- A) bitter                              B) salty  
C) greasy                            D) sour

5 | Which of the following shows what Sarah prefers having most?

- A) B)   
C) D)

6 | Which of the following is CORRECT?

- A) Sarah mostly has a healthy eating habit.  
B) Sarah hates having salty food.  
C) Sarah never has lemons in her meal.  
D) Spicy food is not one of her favourites.

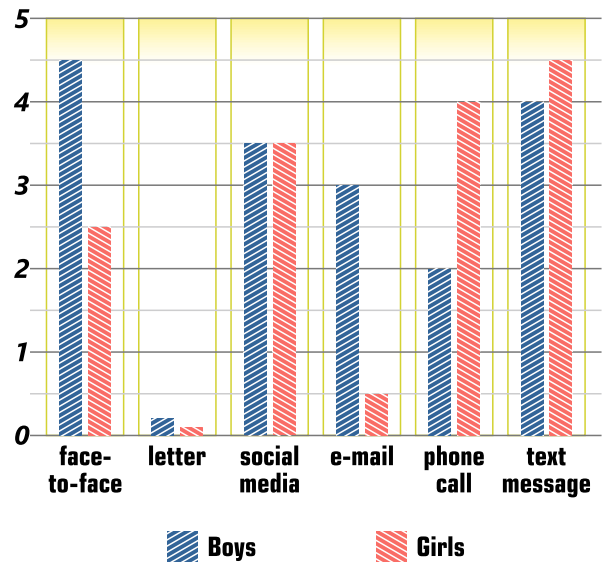
Answer the questions (7-9) according to the information below.

Adam and Fiona are twins. However, they mostly have different interests. Following chart shows what they like doing in their free time.

Activities	Adam	Fiona
camping	+	+
hang gliding	-	+
caving	-	+
scuba diving	-	+
trekking	+	-
water polo	+	-
ice skating	+	-

Answer the questions (10-12) according to the information below.

How do teenagers prefer keeping touch with their friends?



7 | Which of the following shows what both of them prefer doing?




8 | According to the chart, ----.

- A) only Adam enjoys spending time in nature
- B) Fiona doesn't take risks at all
- C) Fiona likes testing herself against nature
- D) Adam is an adrenalin seeker

9 | Which of the following is NOT correct?

- A) Adam only prefers safer activities.
- B) Fiona likes exploring underwater.
- C) Adam enjoys nature walking.
- D) They don't have anything in common at all.

10 | How do girls prefer communicating LEAST?



11 | According to the chart, ----.

- A) not many teens prefer traditional ways
- B) all boys prefer writing e-mails
- C) not many girls send text messages
- D) phone call is more popular among boys

12 | When compared to boys, less girls prefer using ---- to communicate.

- A) text messages
- B) social media
- C) phone calls
- D) e-mails

- |             |              |
|-------------|--------------|
| <b>1. A</b> | <b>7. C</b>  |
| <b>2. D</b> | <b>8. C</b>  |
| <b>3. C</b> | <b>9. D</b>  |
| <b>4. A</b> | <b>10. B</b> |
| <b>5. A</b> | <b>11. A</b> |
| <b>6. D</b> | <b>12. D</b> |